

End of Term 1 test Grad 2

Math exam

Name: ...Mohammad eyad...


Year 2018 /2019

Page num: (5)

Class:2 D.....

Q1: Choose the correct

1. The correct number sentence fact to find sum is?

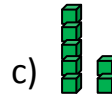
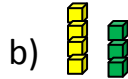
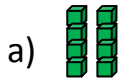


a) $4 + 4 = 8$

b) $5 + 5 = 10$

c) $4 + 5 = 9$

2. Choose the near double



3. Which addition sentence could help solve this problem?

$7 + 6 = \dots\dots\dots$

a) $10 + 7 = 17$

b) $10 + 6 = 16$

c) $10 + 3 = 13$

4. Find the sum

$9 + 5 + 1 = \dots\dots\dots$

a) 15

b) 13

c) 14

5. Khalid has 6 cars toy Mohamad has same number of cars.

How many cars they have in all?

a) 13

b) 11

c) 12

6. 9 butterfly in the tree, they all fly away.

How many butterflies are still in the tree?

a) 9

b) 0

c) 18


7. Mark the number sentence that uses doubles to subtract.

a) $8 - 4 = 4$

b) $8 - 8 = 0$

c) $8 - 2 = 6$

8. Find the missing addend



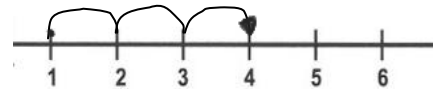
$8 + \square = 14$

a) 7

b) 6

c) 8

9. Use number line to find correct sentence.



a) Count on to subtract

b) Count back to subtract

c) Count on to add

10. Which number that shows the sum?

$8 - 5 = 3$

a) 3

b) 5

c) 8

11. Choose the group that skip counting .

a) 20, 22, 25, 27, 29

b) 20, 22, 24, 26, 28

c) 12, 17, 25, 30, 35

12. The missing number is


20, 30, \square , 50, 60

a) 55

b) 25

c) 40

13. Repeated addition to find the total



a) 15

b) 10

c) 20

14. The car has 4 tires, how many tires in 3 cars?



a) 10

b) 8

c) 12

15. Husam thinking an odd number between 24, 27 what is the number?

a) 25

b) 26

c) 29

16. How could you take apart to find the sum?

$$16 + 24 = \dots\dots\dots$$

a) $16 + 2 + 4$

b) $1 + 6 + 24$

c) $16 + 4 + 20$

17. There are 21 apples in the box, Khawlah put more 9 apples.
How many apples in the box?

a) 12

b) 30

c) 31

18. Choose the add sentence that need regroup.

a) $23 + 5$

b) $60 + 4$


c) $56 + 9$

19. Find the missing number

?	3
+ 1	4
<hr/>	
6	7

- a) 7 b) 5 c) 4

20. In the first drawer of Huda's fridge 7 strawberries and 5 strawberries in the second drawer.

Huda ate  . How many strawberries are in the fridge ?

- a) 10 b) 14 c) 12

Q2: answer the question

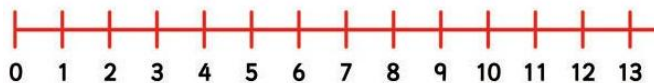
21. Hesah has 3 stories, she bought more 8 stories

How many stories does Hesah have?

_____ ○ _____ ○ _____

----- Stories

22. Use the number line and count back to subtract

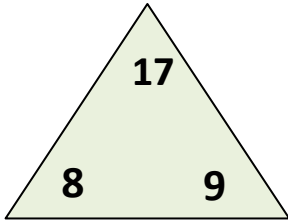


11 - 3 =

23. Write the equal addends that make the sum

+ = 18

24. Complete the fact family



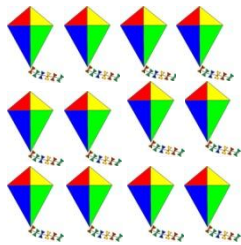
..... + =

..... + =

..... + =

..... + =

25. Describe array using a number sentence



..... + + =


..... Rows of Kite

26. Hind draw pineapple

Is the number of pineapples even or odd?

Explain:

.....



27.

	6	7
+	2	8
<hr/>		

28.

	3	1
	2	5
+	1	2
<hr/>		

29.

	1	1
	1	4
	3	6
+	2	0
<hr/>		